

සියලු ම හිමිකම් ඇවිරිණි]
முழுப் பதிப்பரிமையடையது]
All Rights Reserved]

ශ්‍රී ලංකා විභාග දෙපාර්තමේන්තුව / இலங்கைப் பரீட்சைத் திணைக்களம் / Department of Examinations, Sri Lanka

Sri Lanka Law College Entrance Examination - 2021

(02) General Knowledge and General Intelligence

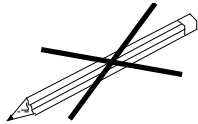
Two hours

Part I - General Knowledge

Instructions to candidates

Very Important

Do not use Pencils
to write answers.



* *When answering, write down the digits as mentioned below.*

0 1 2 3 4 5 6 7 8 9

Write your Index Number here and
on page 3 in the spaces indicated.

.....

Index number is checked as correct

.....

Invigilator's Initials

Important :

- * *Subject No. (02) General Knowledge and General Intelligence paper consists of two parts as Part I - General Knowledge and Part II - General Intelligence.*
- * *The time allowed for both parts is two hours.*
- * *Part I - General Knowledge paper consists of 50 questions on 06 pages.*
- * *Answer all questions on this paper itself.*
- * *Instructions given should be strictly followed in answering this paper and marks will not be awarded for answers not in accordance with these instructions.*
- * *Even if you are not attempting the paper hand it over to the Supervisor.*
- * *Handover the answer script I and II separately.*
- * *Write the answers clearly and legibly in blue or black ink only and not in pencil.*
- * *It is an offence to remove this paper from the examination hall, turn out photos or photocopies of the same.*
- * *Answer scripts with illegible figures, illegible handwriting, those where erasing fluid has been used and written in pencil will not be marked / evaluated.*

For Examiner's use only

Page No.	Question No.	Marks Awarded
2	1 - 9	
3	10 - 17	
4	18 - 27	
5	28 - 40	
6	41 - 50	
Total		

Final Score

In figures	
In words	
Answer Script	Marked by
	Checked by
Chief Examiner	

- Questions from No. 1 to 30 select the **correct** or **most appropriate** answer and write its **number on the dotted line** given against each question.
1. As shown in the 2019 Annual Report of Central Bank of Sri Lanka the unemployment rate prevailed in year 2019 in Sri Lanka
 - (1) increased from 4.4% in previous year to 4.8%.
 - (2) decreased from 5.8% in previous year to 5.2%.
 - (3) increased from 6.3% in previous year to 7.2%.
 - (4) decreased from 8.2% in previous year to 7.3%. (.....)
 2. What was the percentage of External Debt of Sri Lanka against the Gross Domestic Product (GDP) in 2019, according to the Annual Report of Central Bank of Sri Lanka for 2019?
 - (1) 40.2%
 - (2) 59.3%
 - (3) 66.6%
 - (4) 72.1% (.....)
 3. Which of the following is considered to be the cause for the highest number of deaths in Sri Lanka at present?
 - (1) Cancer
 - (2) Motor accidents
 - (3) Heart diseases
 - (4) Suicides (.....)
 4. The 'Rajakari system' (an element of feudal system) which was in force in country from ancient times was ceased by which reforms?
 - (1) Colebrooke
 - (2) McCullum
 - (3) Donouhmore
 - (4) Soulbury (.....)
 5. The Supreme Court of Sri Lanka consisted of the Chief Justice and 6 to 10 other Judges in number, prior to the 20th Amendments to the Constitution. According to the 20th Amendment, the Supreme Court shall consist of the Chief Justice and how many other Judges?
 - (1) 5 to 15
 - (2) 6 to 16
 - (3) 8 to 17
 - (4) 10 to 19 (.....)
 6. Among ancient tanks of Sri Lanka what was the largest tank built in Anuradhapura period?
 - (1) Minneriya Wewa
 - (2) Kala Wewa
 - (3) Yodha Wewa
 - (4) Kantale Wewa (.....)
 7. The only 'Referendum' reported in the political history of this country was held in 1982. It was held to seek the public opinion for, which of the following?
 - (1) An amendment to the Constitution
 - (2) To extend the term of the Parliament
 - (3) An impeachment against the President
 - (4) To remove the Chief Justice (.....)
 8. The Governor of a Provincial Council is appointed by,
 - (1) the President.
 - (2) the Cabinet of Ministers.
 - (3) the majority vote of the members of the Provincial Council.
 - (4) Public vote in a Provincial Council election. (.....)
 9. Which of the following can be dealt under the field of 'Extradition Law'?
 - (1) To bring back a criminal who is absconding in another country before the court of a country.
 - (2) A sexual harassment at a workplace.
 - (3) Illegal exposure of treasures in a religious place with historical ruins.
 - (4) Violation of coast conservation laws by large scale removal of sea sand causing sea erosion. (.....)



10. What is considered to be the prime duty of an Attorney-at-Law from the following?
- (1) To get his client some way other acquitted
 - (2) To assist the court
 - (3) To demonstrate his legal skills through arguments in court
 - (4) To make sure the criminal is convicted (.....)
11. Which of the following is the simple meaning of the Latin phrase "*Fiat justitia*", the motto of the Sri Lanka Law College?
- (1) The Law stands above all. (2) Law is the guardian of justice.
 - (3) Let justice be done. (4) Law is the trust of justice. (.....)
12. 'Fiscals' are a category of persons who play an important role in the court system. One of their main functions is,
- (1) to stand in front of the judge and explain what he says in a high tone.
 - (2) to enter an accused to the cell when declared his conviction.
 - (3) to assist the judge by bringing the case files etc.
 - (4) to seize properties upon the order of the judge. (.....)
13. Government recently made a decision to prohibit the palm (oil) cultivation in this country. Which of the following was highlighted as the **biggest** harm caused by it?
- (1) The threat faced by the tea and rubber plantations.
 - (2) The threat of drying up of the underground water resources.
 - (3) Being a severe cause for rural unemployment because it needs only a minimum labour.
 - (4) Causing threat to the public health by extensive use of palm oil. (.....)
14. The important judgments pronounced by Superior Courts in this country after 1978 are officially recorded in,
- (1) New Law Reports.
 - (2) Gazettes.
 - (3) Annual Report of Bar Association of Sri Lanka.
 - (4) Sri Lanka Law Reports. (.....)
15. Who was the author of the world renowned great work titled 'Das Kapital'?
- (1) Fyodor Dostoevsky (2) Leon Trotsky
 - (3) Karl Marx (4) Vladimir Lenin (.....)
16. Which of the following is done in an 'Adoption Case'?
- (1) Inquiring into a case filed to obtain the legal parentage of a child.
 - (2) Attempt of unifying a married couple about to divorce.
 - (3) Inquire into a case filed against a person who has defaulted a marriage promise.
 - (4) Inquire into a case against a person who is defaulting the payment of maintenance that is due to a child. (.....)
17. Which of the following is **not** a ground to file a divorce case under the General Matrimonial laws in Sri Lanka?
- (1) Adultery
 - (2) Incurable sexual impotency prior to the marriage
 - (3) Marriage is dissolved by mutual agreement as both parties cannot get on well
 - (4) Malicious desertion (.....)

18. In which of the following cities the Summer Olympics Games 2024 will be held?
 (1) Paris. (2) Athens. (3) Beijing. (4) Seoul. (.....)
19. A patient became blind due to the lack of care in medical treatment given by a Doctor. What is the branch of law related to filing a case to claim that it has been caused by the medical negligence of the Doctor?
 (1) Administration Law (2) Law of Delict
 (3) Law of Contract (4) Law of Intellectual Property (.....)
20. Which of the following institutions has introduced and is operating the 'Sri Lanka Depositors Insurance and Liquidity Assistance Scheme' for the protection of Depositors of financial institutions in this country?
 (1) Ministry of Finance (2) Presidential Secretariat
 (3) Sri Lanka Insurance Corporation (4) Central Bank of Sri Lanka (.....)
21. Which of the following construction project for which the largest investment was/is made in Sri Lanka by China Communications Construction Company?
 (1) Hambantota Port (2) Southern Express way
 (3) Colombo Port City (4) Mattala Airport (.....)
22. Large amount of container shipments sent from the United Kingdom were returned recently. What were contained in those containers?
 (1) Used computers
 (2) Time expired food items
 (3) Raw materials required to produce liquor
 (4) Garbage (.....)
23. Norochchole thermal power generating plant presently in operation was constructed with the assistance of which country?
 (1) India (2) China
 (3) Japan (4) The United Kingdom (.....)
24. Who is the present Chairman of the Monetary Board of the Central Bank of Sri Lanka?
 (1) Mr. S.R. Attygalle (2) Dr. P.B. Jayasundara
 (3) Prof. W.D. Lakshman (4) Dr. Indrajit Coomaraswamy (.....)
25. Which of the following places a fishery harbour has **not** been constructed despite it being reputed for fishing industry?
 (1) Valachchena (2) Kirinda (3) Negombo (4) Panadura (.....)
26. Which of the following is reported to be the first cooperative society formed in this country?
 (1) Sandalankawa Cooperative Society
 (2) Dumbara Valley Cooperative Society
 (3) Hingurakgoda Cooperative Society
 (4) Ambalangoda-Balapitiya Cooperative Society (.....)
27. Which of the following was the first film fully locally produced in Sri Lanka?
 (1) Gamperaliya (2) Ranmuthuduwa
 (3) Sathsamudura (4) Rekhawa (.....)

- 28. Who is the following Artist has **not** been awarded the ‘Ramon Magsaysay’ International Award?
 (1) Nanda Malini (2) Pandit W.D. Amaradewa
 (3) Fr. Marcelline Jayakody (4) Gethsie Shanmugam (.....)
- 29. At the end of the Second World War, the International Monetary Fund (IMF) was established in 1945,
 (1) at the Bretton Woods Conference.
 (2) by the Geneva Convention.
 (3) by the Warsaw Convention.
 (4) by a proclamation of the United Nations. (.....)
- 30. Which of the following country that is **not** a permanent member of the Security Council of the United Nations Organization?
 (1) China (2) France (3) India (4) Russia (.....)
- Write correct answer **on dotted lines** for the questions **31 to 50**.
- 31. What is the name of the **first** vaccine in Sri Lanka at present against ‘COVID-19’ virus?

- 32. Which system of the human body is connected to ‘Parkinson’ disease?

- 33. Which place has been planned (as at now) to be the destination of the Kandy extension of the Central Express way?

- 34. Who was the newly elected Vice President of United States of America in the last presidential election?

- 35. Which Court has the jurisdiction to try Testamentary cases?

- 36. Who is the Chairman of the ‘Committee on Public Enterprises (COPE)’ in the present parliament?

- 37. What is the **minimum** period of time that a person should have an uninterrupted and continuous possession of a property to claim the prescriptive title of it?

- 38. In order to file a testamentary action, what is the **minimum** value of movable and immovable assets a person should possess at the time of his death?


- 39. What is the oldest government department established in this country under the British rule?

- 40. What is the name of the oath given by the medical doctors to observe their professional ethics?



- 41. A controversy arose on an attempt to remove a tree which is endemic to Sri Lanka and subject to extinction, in the construction of the central express way. What is the Scientific name of that plant?
.....
- 42. What is the other ingredient required to make a concrete mixture in addition to cement, rubble, sand and steel?
.....
- 43. Who is the newly elected President of the Bar Association of Sri Lanka?
.....
- 44. Who functions as the main cricket coach of Sri Lanka at present?
.....
- 45. What is the name of the Swedish girl who started an international movement of Climate Change?
.....
- 46. What is the political party that Joe Biden represented in the Presidential Election held in USA recently?
.....
- 47. What is the name of the Department which compiles the Colombo Consumer Price Index?
.....
- 48. What do you mean by 'Anticipatory bail' that can be pleaded in a court?
.....
- 49. According to the present laws what is the mandatory percentage of female representation required to fulfil in a local government election?
.....
- 50. Two persons were awarded the Nobel Prize for Chemistry in year 2020. One of them is Jennifer Doudna, an American. What is the name of the other co-prize winner who is a French national?
.....

* *



It is prohibited to tear off this paper from the question paper or taken out from the examination hall.

Only for rough work

DOEE

සියලු ම හිමිකම් ඇවිරිණි]
முழுப் பதிப்பரிமையடையது]
All Rights Reserved]

ශ්‍රී ලංකා විභාග දෙපාර්තමේන්තුව / இலங்கைப் பரீட்சைத் திணைக்களம் / Department of Examinations, Sri Lanka

Sri Lanka Law College Entrance Examination - 2021

(02) General Knowledge and General Intelligence

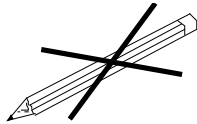
Two hours

Part II - General Intelligence

Instructions to candidates

Very Important

Do not use Pencils
to write answers.



* *When answering, write down the digits as mentioned below.*

0 1 2 3 4 5 6 7 8 9

Write your Index Number here and on
pages 3 and 5 in the spaces indicated.

.....

Index number is checked as correct

.....

Invigilator's Initials

Important :

- * *Subject No. (02) General Knowledge and General Intelligence paper consists of two parts as Part I - General Knowledge and Part II - General Intelligence.*
- * *The time allowed for both parts is two hours.*
- * *Part II - General Intelligence paper consists of 50 questions on 9 pages.*
- * *Answer all questions on this paper itself.*
- * *Calculators are not allowed.*
- * *Handover the answer script I and II separately.*
- * *Instructions given should be strictly followed in answering this paper and marks will not be awarded for answers not in accordance with these instructions.*
- * *Even if you are not attempting the paper hand it over to the Supervisor.*
- * *Write the answers clearly and legibly in blue or black ink only and not in pencil.*
- * *It is an offence to remove this paper from the examination hall, turn out photos or photocopies of the same.*
- * *Answer scripts with illegible figures, illegible handwriting, those where erasing fluid has been used and written in pencil will not be marked / evaluated.*

For Examiner's use only

Page No.	Question No.	Marks Awarded
2	1 - 8	
3	9 - 15	
4	16 - 25	
5	26 - 31	
6	32 - 37	
7	38 - 45	
8	46 - 48	
9	49 - 50	
Total		

Final Score

In figures		
In words		
Answer Script	Marked by	
	Checked by	
Chief Examiner		

- In each question from No. 1 to 5, a set of three inter-related words are given at the beginning. Select the choice with a **similar relationship** from among the choices given below and write its **number on the dotted line** given against the question.

1. Seed : Plant : Tree

- (1) Foetus : Child : Adult
(3) Ice : Water : Steam

- (2) Son : Father : Grandfather
(4) Past : Present : Future

(.....)

2. Good : Bad : Excellent

- (1) Wet : Dry : Cool
(3) Up : Down : Height

- (2) Neutron : Electron : Proton
(4) Strong : Weak : Powerful

(.....)

3. Price : Supply : Demand

- (1) Rain : Flood : Water
(3) Efficiency : Productivity : Wastage

- (2) Capacity : Volume : Space
(4) Speed : Distance : Time

(.....)

4. Doctor : Patient : Treatment

- (1) Teacher : Student : Syllabus
(3) Judge : Lawyer : Judgement

- (2) Consumer : Businessman : Transaction
(4) Leader : Follower : Direction

(.....)

5. Tailor : Cloth : Dress

- (1) Carpenter : Timber : Furniture
(3) Farmer : Land : Harvest

- (2) Barber : Scissor : Hair
(4) Musician : Lyrics : Song

(.....)

- For each question from No. 6 to 15 select the **correct** or **most appropriate** answer and write its **number on the dotted line** given against each question.

6. When a certain number is divided by 13 the remainder is 11. When the same number is divided by 17, the remainder is 16. What is the number of the following?

- (1) 37 (2) 50 (3) 63 (4) 67 (.....)

7. An express train running at the speed of 80 kilometres per hour, passes a man standing on the platform in 9 seconds. What is the length of the train in metres?

- (1) 120 (2) 160 (3) 200 (4) 240 (.....)

8. One day, in a school, at the end of first period, 10 students moved from class A to class B resulting the number of students in each class becoming equal. At the end of the second period, 20 students moved from class B to class A making the number of students in class A double the number of students in class B. How many students were in class A during the first period?

- (1) 60 (2) 70 (3) 80 (4) 90 (.....)

for rough work

2

9. There are two machines in a factory, one new and other one is old. The new machine can finish a task in 30 hours while the old machine takes 60 hours to finish the same task. In order to expedite the task, the factory manager starts operating both machines together. What is the percentage of the task completed in 10 hours?
(1) 40% (2) 50% (3) 55% (4) 60% (.....)
10. For any two integers, the symbol \ominus represents the action of subtracting the second number from the first one, and the symbol \otimes represents the action of taking twice the multiplication of those two numbers. Accordingly, what is the value of $1 \ominus [(-2) \otimes 3]$?
(1) -13 (2) -11 (3) 11 (4) 13 (.....)
11. When Nishika was born, her father was 29 years old and when her brother, who is three years younger to her was born her mother's age was 31 years. What is the age difference of Nishika's parents in years?
(1) 0 (2) 1 (3) 2 (4) 3 (.....)
12. Mrs. Perera opened a savings account and deposited Rs. 500 000 at 3.5% per annum simple interest. How many years will it take for her to get Rs. 35 000 as interest?
(1) 2 (2) 3 (3) 4 (4) 5 (.....)
13. In a group of students following an undergraduate study programme, one-third of students are below 19 years of age and the number of students above 19 years of age is 20% of the number of students who are 19 years of age, which is 50. What is the total number of students in the group?
(1) 80 (2) 90 (3) 100 (4) 120 (.....)
14. In a family of 9 siblings, the eldest is 28 years and youngest 3 years old. The average age of other 7 children is one year less than the average age of all siblings. What is the average age of 9 siblings in years?
(1) 9 (2) 11 (3) 12 (4) 14 (.....)
15. In a general election, in one polling division, four parties W, X, Y and Z received votes in the proportion of 8:6:3:1 respectively. If party X got 20 000 more votes than party Z, how many votes did party W get?
(1) 24 000 (2) 28 000 (3) 30 000 (4) 32 000 (.....)

for rough work

- In each question from No. **16** to **20**, a certain statement and two quantities named **I** and **II** are given. Compare the two quantities with respect to the given statement and choose the answer
 A, if the quantity in **I** is greater than the quantity in **II**,
 B, if the quantity in **II** is greater than the quantity in **I**,
 C, if the two quantities in **I** and **II** are equal,
 D, if the greater quantity cannot be determined

and write it **on the dotted line** given against each question.

- 16.** Hassan walks at a constant rate of 5 kilometres per hour.
I - The distance walked by Hassan in 80 minutes
II - 6.5 kilometres (.....)
- 17.** The monthly electricity usage in a household was 160 units last month. In this month it is 15% more.
I - The monthly electricity usage in this month in units
II - 184 (.....)
- 18.** In a certain library, the ratio between the number of fiction books and the non-fiction books is 6:5. Total number of fiction books and the non-fiction books in the library is 5500.
I - Number of fiction books
II - 2500 (.....)
- 19.** x is two times y . z is one-third of x . $x + y + z = 77$.
I - z
II - 14 (.....)
- 20.** n is an integer satisfying $4n > 45$ and $3n < 42$
I - n
II - 12 (.....)

- In each of the questions from No. **21** to **25**, there is a letter/number pattern followed. By looking at these patterns, choose the most appropriate choice to fill the blank denoted by ? of the pattern and write its **number on the dotted line** given against the question.

- 21.** JQR, KST, LUV,?....., NYZ
 (1) MWX (2) MUW (3) MVW (4) MNX (.....)
- 22.** C₃OVID, CO₅VID,?....., COV₉D, COVID₁₁
 (1) CO₇VID (2) COV₆ID (3) COV₇ID (4) COV₈ID (.....)
- 23.** DYEZF, GYHZI,?....., MYNZO, PYQZR, SYTZU
 (1) IYJZK (2) JKYZL (3) JYKLZ (4) JYKZL (.....)
- 24.** Q9PO,?....., K7JI, H6GF, E5DC
 (1) N8ML (2) N8LM (3) M8NL (4) NM8L (.....)
- 25.** Z₂U, YV₄, X₆W, WX₈, V₁₀Y, ...?.....
 (1) UZ₁₂ (2) UZ₁₁ (3) U₁₂Z (4) VZ₁₂ (.....)

for rough work

32. What is the correct statement regarding Q ?
- (1) Q , who works in the Pension branch comes to work by train.
 - (2) Q , who works in the Establishment branch comes to work by train.
 - (3) Q , who works in the Audit branch comes to work by train.
 - (4) Q , who works in the Audit branch comes to work by bus. (.....)
33. What is the correct statement regarding T ?
- (1) T , who works in the Establishment branch comes to work by train.
 - (2) T , who works in the Pension branch comes to work by car.
 - (3) T , who works in the Audit branch comes to work by car.
 - (4) T , who works in the Establishment branch comes to work by car. (.....)
34. R and T are working in the
- (1) Pension and Audit branches respectively.
 - (2) Pension and Establishment branches respectively.
 - (3) Establishment and Audit branches respectively.
 - (4) Audit and Establishment branches respectively. (.....)
35. Which is the correct statement among the following?
- (1) Q comes to work by train and T comes to work by bus.
 - (2) Q comes to work by car and T comes to work by train.
 - (3) Q comes to work by train and T comes to work by car.
 - (4) Q comes to work by bus and T comes to work by car. (.....)
- Questions from No. 36 to 40 are based on the following information
 - * The five members in a family, P , Q , R , S and T consist of father, mother, elder son, daughter and younger son, not in the same order.
 - * Three of them P , R and daughter prefer tea to coffee.
 - * Two of them, Q and the mother prefer coffee to tea.
 - * Out of the three members, the younger son, S and P , two of them prefer coffee to tea.
 - * The elder son and R like to watch Cricket matches together.

Accordingly, select the correct answer for each question and write its **number on the dotted line** given against the question.
36. Who is the elder son?
- | | | | | |
|---------|---------|---------|---------|---------|
| (1) P | (2) Q | (3) R | (4) S | (.....) |
|---------|---------|---------|---------|---------|
37. Who is the younger son?
- | | | | | |
|---------|---------|---------|---------|---------|
| (1) P | (2) Q | (3) R | (4) S | (.....) |
|---------|---------|---------|---------|---------|

for rough work



38. Who is the mother?
 (1) *Q* (2) *R* (3) *S* (4) *T* (.....)

39. Who is the father?
 (1) *Q* (2) *R* (3) *S* (4) *T* (.....)

40. Which of the following statements is true?
 (1) The father prefers tea to coffee.
 (2) Elder son prefers coffee to tea.
 (3) The father prefers coffee to tea.
 (4) Younger son likes to watch cricket matches. (.....)

- Questions from No. 41 to 45 are based on the following information

Amal, Bimal, Cyril and Dayal are four applicants sitting for the Sri Lanka Law College Entrance Examination. They have done the same three subject combination, Economics, Geography and History for the GCE A/L Examination. All four have passed English subject in the GCE O/L Examination. Each of them has grades A, B, C and S for the **four** subjects mentioned above.

- * Amal has A grade for Economics and C grade for O/L English.
- * Bimal has A grade for History and B grade for O/L English.
- * Cyril has C grade for History and B grade for Economics.
- * Dayal has S grade for History.
- * Each student has obtained 1 A grade, 1 B grade, 1 C grade and 1 S grade.
- * Each subject has 1 A grade, 1 B grade, 1 C grade and 1 S grade.

Accordingly, select the correct answer for each question and write its **number on the dotted line** given against the question.

41. Who has A grade for O/L English?
 (1) Amal (2) Bimal (3) Cyril (4) Dayal (.....)

42. Who has S grade for Geography?
 (1) Amal (2) Bimal (3) Cyril (4) Dayal (.....)

43. Who has the C grade for Economics?
 (1) Amal (2) Bimal (3) Cyril (4) Dayal (.....)

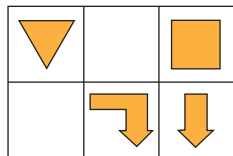
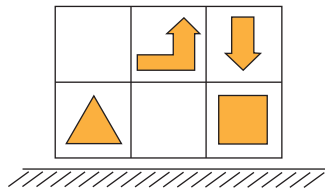
44. Which of the following has Cyril got?
 (1) A grade for Geography (2) B grade for Geography
 (3) C grade for Economics (4) S grade for Economics (.....)

45. Which of the following has Bimal got?
 (1) S grade for Geography (2) B grade for Geography
 (3) S grade for Economics (4) B grade for Economics (.....)

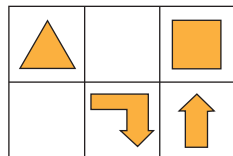
for rough work

- For questions from No. 46 to 50 select the correct answer and write its **number on the dotted line** given against each question.

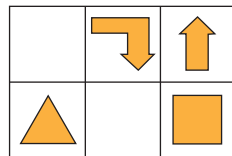
46. Which choice shows mirror image of the given figure below?



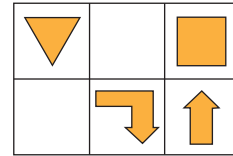
(1)



(2)



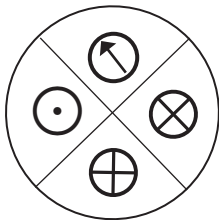
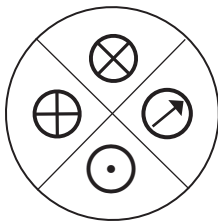
(3)



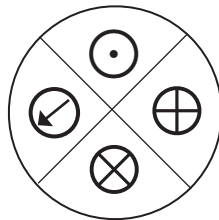
(4)

(.....)

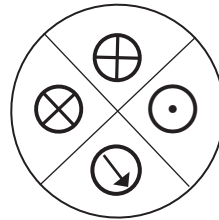
47. Which choice shows a rotation of the given figure below?




(1)



(2)



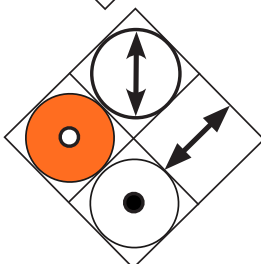
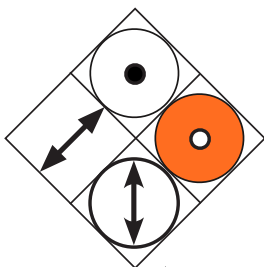
(3)



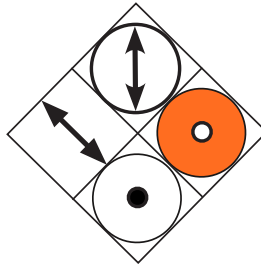
(4)

(.....)

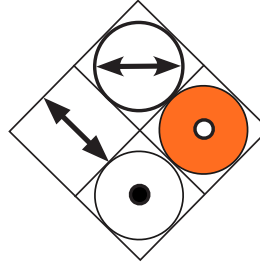
48. Which choice shows a rotation of the given figure below?



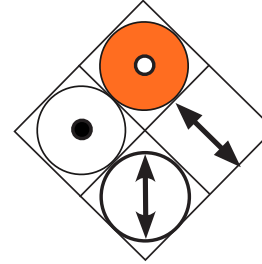
(1)



(2)



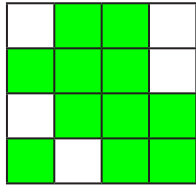
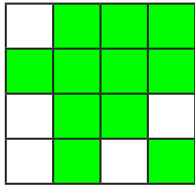
(3)



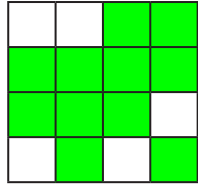
(4)

(.....)

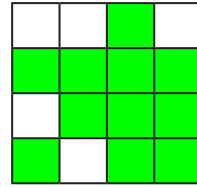
49. Which choice shows a rotation of the given figure below?



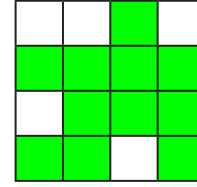
(1)



(2)



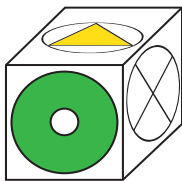
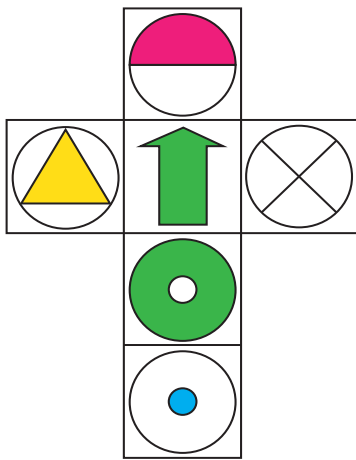
(3)



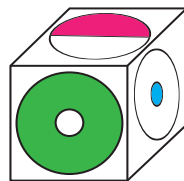
(4)

(.....)

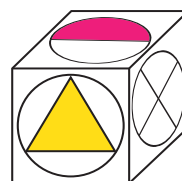
50. Which is the choice, that shows the cube that can be made from the given block?



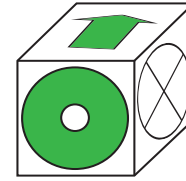
(1)



(2)



(3)



(4)

(.....)

* * *



It is prohibited to tear off this paper from the question paper or taken out from the examination hall.

Only for rough work

DO NOT

